

Missing Number – Addition

$$\underline{\quad\quad} + \underline{\quad\quad} = \square$$

$$\underline{\quad\quad} + \underline{\quad\quad} = \square$$

$$\underline{\quad\quad} + \underline{\quad\quad} = \triangle$$

$$\underline{\quad\quad} + \underline{\quad\quad} = \triangle$$

$$\underline{\quad\quad} + \underline{\quad\quad} = \triangle$$

$$\underline{\quad\quad} + \underline{\quad\quad} = \triangle$$

$$\underline{\quad\quad} + \underline{\quad\quad} = \bigcirc$$

$$\underline{\quad\quad} + \underline{\quad\quad} = \bigcirc$$

$$\underline{\quad\quad} + \underline{\quad\quad} = \bigcirc$$

$$\underline{\quad\quad} + \underline{\quad\quad} = \bigcirc$$

$$\underline{\quad\quad} + \underline{\quad\quad} = \text{house}$$

$$\underline{\quad\quad} + \underline{\quad\quad} = \text{house}$$

$$\underline{\quad\quad} + \underline{\quad\quad} = \text{house}$$


$$\underline{\quad\quad} + \underline{\quad\quad} = \text{house}$$


$$\underline{\quad\quad} + \underline{\quad\quad} = \star$$


$$\underline{\quad\quad} + \underline{\quad\quad} = \star$$

Name _____

Missing Number – Subtraction

_____ – _____ = 

_____ – _____ = 


_____ – _____ = 


_____ – _____ = 

_____ – _____ = 


_____ – _____ = 


_____ – _____ = 


_____ – _____ = 

_____ – _____ = 

_____ – _____ = 

_____ – _____ = 

_____ – _____ = 

_____ – _____ = 

_____ – _____ = 

_____ – _____ = 

_____ – _____ = 