


Measurement Mania Recording Sheets



Mine will be _____ in line.

estimate _____


actual _____



I can eat mine in _____ bites.

estimate _____

actual _____



How many bugs weigh the same?

estimate _____

actual _____



How many bugs wide?

estimate _____

actual _____



How many bugs tall?

estimate _____


actual _____



How many bugs long?

estimate _____


actual _____



How many animals long?

estimate _____


actual _____



How many animals tall?

estimate _____


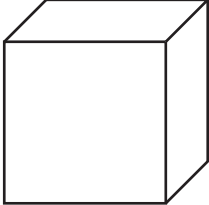


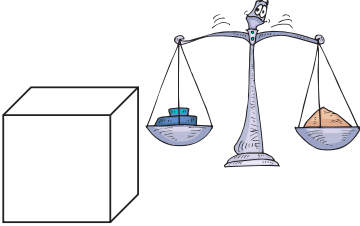




actual _____








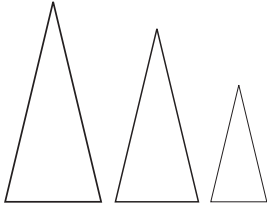
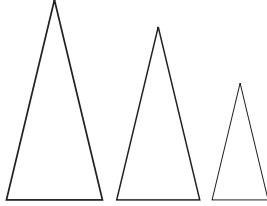
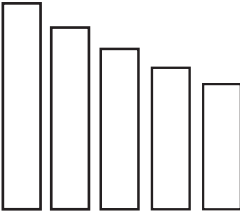
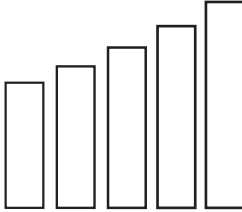

How many animals wide?


estimate _____

actual _____

 <p>How many pattern blocks weigh the same? estimate _____ actual _____</p>	 <p>How many cubes equal the same height? estimate _____ actual _____</p>	 <p>How many tiles would be as long as this is around? estimate _____ actual _____</p>
 <p>How many links would it take to go around? estimate _____ actual _____</p>	 <p>How many blocks weigh the same? estimate _____ actual _____</p>	 <p>How many snap cubes would it take to make a cube about the same? estimate _____ actual _____</p>
 <p>How many beads would it take to go around? estimate _____ actual _____</p>	 <p>How many bears weigh the same? estimate _____ actual _____</p>	 <p>How many inches around? estimate _____ actual _____</p>

 <p>How many animals weigh the same? estimate _____ actual _____</p>	 <p>How many erasers weigh the same? estimate _____ actual _____</p>	 <p>How many erasers wide? estimate _____ actual _____</p>
 <p>How many erasers tall? estimate _____ actual _____</p>	 <p>How many erasers long? estimate _____ actual _____</p>	<p>How many _____ wide? estimate _____ actual _____</p>
<p>How many _____ long? estimate _____ actual _____</p>	<p>How many _____ weigh the same? estimate _____ actual _____</p>	<p>How many _____ tall? estimate _____ actual _____</p>

<p>Mine is _____ than _____.</p> <p>True _____ False _____</p>	 <p>_____</p> <p>is the biggest.</p> <p>True _____ False _____</p>	 <p>_____</p> <p>is the smallest.</p> <p>True _____ False _____</p>
 <p>_____</p> <p>is the tallest.</p> <p>True _____ False _____</p>	 <p>_____</p> <p>is the shortest.</p> <p>True _____ False _____</p>	 <p>_____</p> <p>is the shortest.</p> <p>True _____ False _____</p>
<p>_____</p> <p>_____</p> <p>_____</p> <p>estimate _____ actual _____</p>	<p>_____</p> <p>_____</p> <p>_____</p> <p>True _____ False _____</p>	<p>How many</p> <p>_____</p> <p>will cover it?</p> <p>estimate _____ actual _____</p>



How many pounds does it weigh?

estimate _____
actual _____



How many cups of beans will it hold?

estimate _____
actual _____



How many cups of water will it hold?

estimate _____
actual _____



How many cups of rice will it hold?

estimate _____
actual _____




How many scoops of beans will it hold?

estimate _____
actual _____



How many scoops of rice will it hold?

estimate _____
actual _____




How many scoops of water will it hold?

estimate _____
actual _____






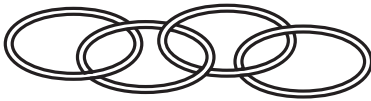




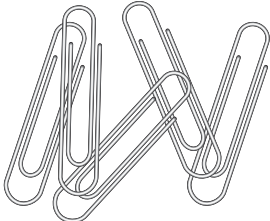
How many inchworms tall?

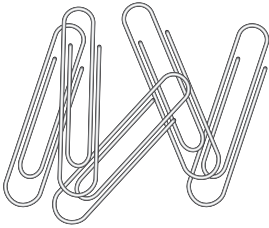
estimate _____
actual _____



How many inches wide?

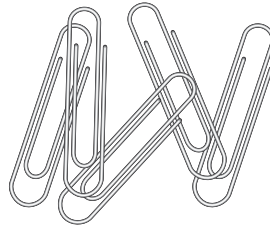
estimate _____
actual _____

 <p>How many links tall? estimate _____ actual _____</p>	 <p>How many inches tall? estimate _____ actual _____</p>	 <p>How many inchworms wide? estimate _____ actual _____</p>
 <p>How many links wide? estimate _____ actual _____</p>	 <p>How many feet tall? estimate _____ actual _____</p>	 <p>How many feet wide? estimate _____ actual _____</p>
 <p>How many tiles wide? estimate _____ actual _____</p>	 <p>How many tiles tall? estimate _____ actual _____</p>	 <p>How many paperclips tall? estimate _____ actual _____</p>




How many paperclips wide?

estimate _____
actual _____




How many paperclips long?

estimate _____
actual _____



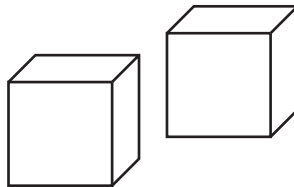
How many cubes weigh the same?

estimate _____
actual _____



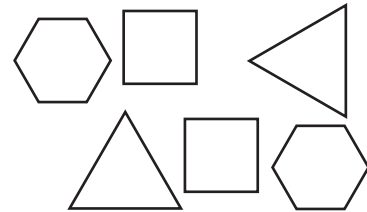
How many beans will cover it?

estimate _____
actual _____



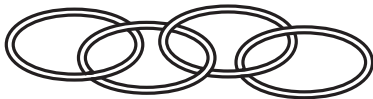
How many cubes will cover it?

estimate _____
actual _____



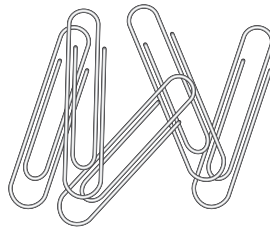
How many pattern blocks will cover it?

estimate _____
actual _____




How many links will go around it?

estimate _____
actual _____



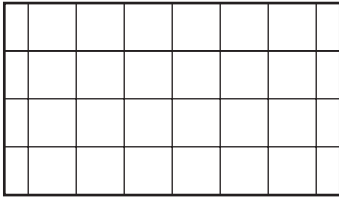
How many paperclips will go around it?

estimate _____
actual _____



How many beans will go around it?


estimate _____
actual _____



How many graph paper squares will it touch?

estimate _____


actual _____



How many straws tall?

estimate _____


actual _____



How many straws wide?

estimate _____

actual _____



How many straws long?

estimate _____

actual _____



How many shoes wide?

estimate _____

actual _____



How many shoes long?

estimate _____

actual _____



How many fingers wide?

estimate _____

actual _____



How many fingers tall?

estimate _____

actual _____



How many fingers long?

estimate _____

actual _____



**How many
hand widths
wide?**

estimate _____

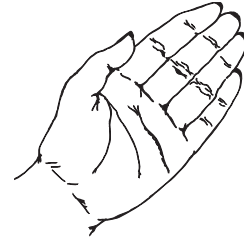
actual _____



**How many
hand widths
tall?**

estimate _____

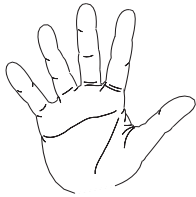
actual _____



**How many
hand widths
long?**

estimate _____

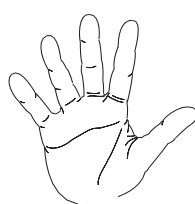
actual _____



**How many
finger spans
wide?**

estimate _____

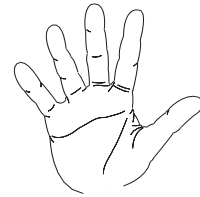
actual _____



**How many
finger spans
long?**

estimate _____

actual _____



**How many
finger spans
tall?**

estimate _____

actual _____



**How many
craft sticks
tall?**

estimate _____

actual _____



**How many
craft sticks
wide?**

estimate _____

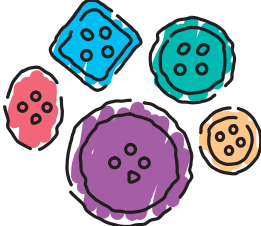








actual _____



**How many
craft sticks
long?**

estimate _____

actual _____


 <p>How many buttons will cover it? estimate _____ actual _____</p>	 <p>How many beads tall? estimate _____ actual _____</p>	 <p>How many beads wide? estimate _____ actual _____</p>
 <p>How many beads long? estimate _____ actual _____</p>	 <p>How many pennies will cover it? estimate _____ actual _____</p>	 <p>How many dimes will cover it? estimate _____ actual _____</p>
 <p>How many nickels will cover it? estimate _____ actual _____</p>	 <p>How many quarters will cover it? estimate _____ actual _____</p>	 <p>How many pipe cleaners to outline it? estimate _____ actual _____</p>



How many pencils tall?

estimate _____


actual _____



How many pencils wide?

estimate _____


actual _____



How many pencils long?

estimate _____


actual _____



How many candies long?

estimate _____


actual _____



How many candies tall?

estimate _____

actual _____



How many candies wide?

estimate _____

actual _____



How many cotton balls will cover it?

estimate _____

actual _____



How many chips will cover it?

estimate _____

actual _____



Mine will hold more or less than the teacher's?


estimate _____

actual _____


Name _____ # _____

Measurement Mania

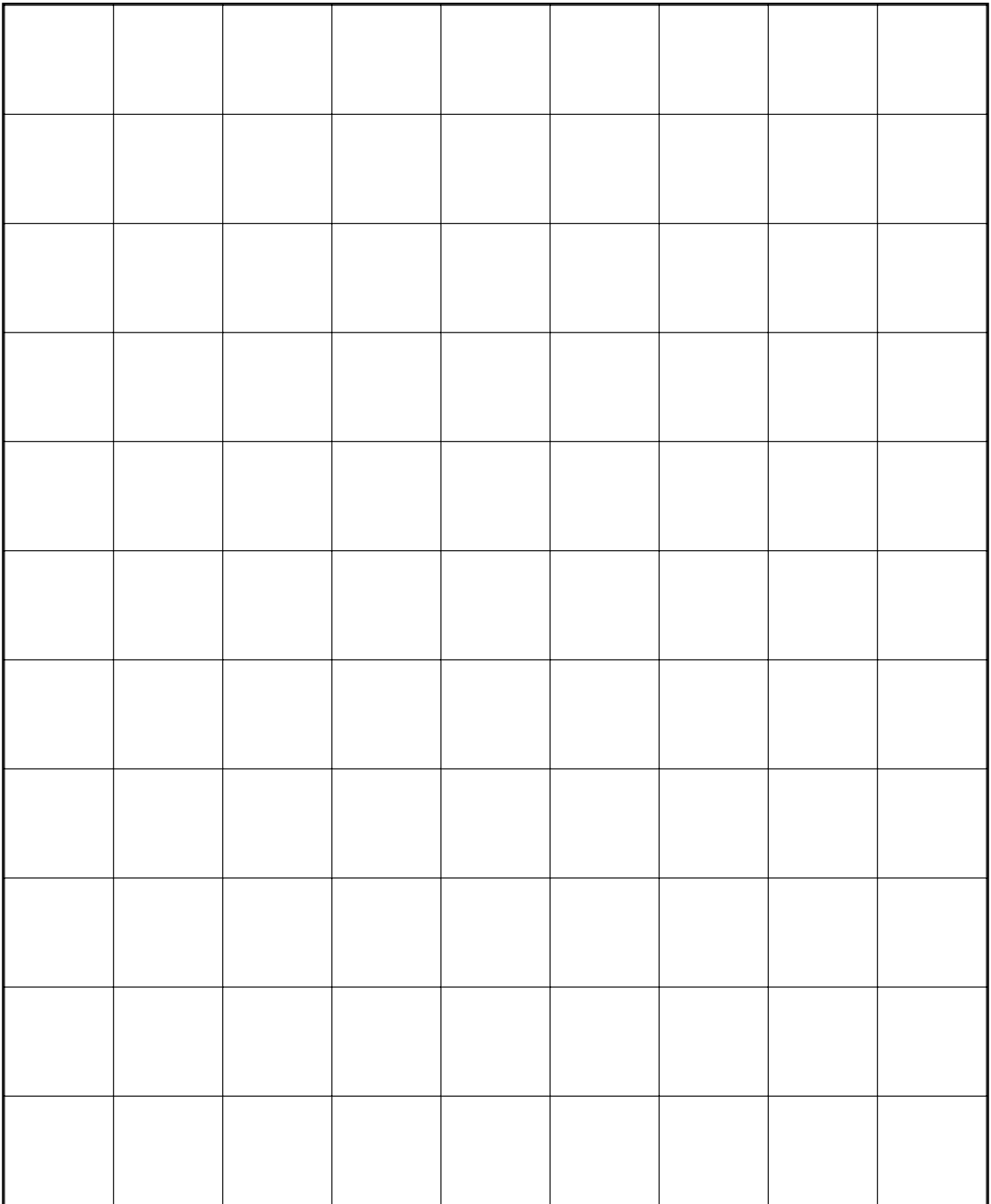
1/2" Grid



5/8" Grid



3/4" Grid



1" Grid

