


Bingo Marker Subtraction

$$2 - 1 =$$

1. Choose a subtraction card.




2. Dot stamp total number of circles



3. Write total number of dots stamped on the subtraction sentence.

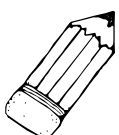


4. X out the number that go away.



5. Write the number of circles X-ed out.

$$2 - 1 = 1$$



6. Record the total number of dots stamps left.