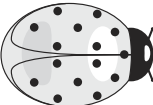


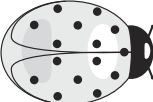
Ladybug Line-Up

Measure the length of each stick using ladybug lima beans. Write the number of ladybug lima beans you used under each line.

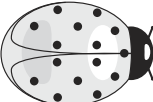
1. 

This line is _____ 's long.

2. 

This line is _____ 's long.

3. 

This line is _____ 's long.

4. 

This line is _____ 's long.

5. 

This line is _____ 's long.

6. 