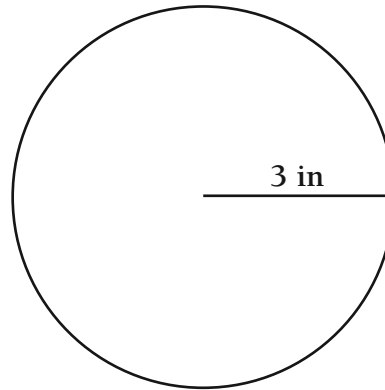


Perimeter and Area

Use the clues to determine which figure is being described.

Figure A



CLUES:

- Its area is less than the area of Figure A.
- Its perimeter or circumference is greater than the circumference of Figure A.

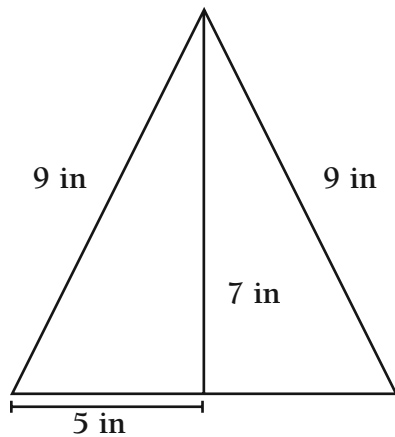


Figure L




Figure M

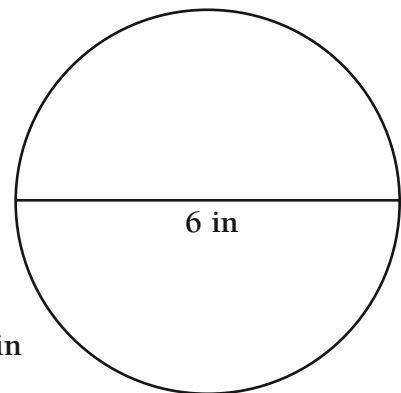


Figure N

1. Which figure is being described? _____

2. How do you know? _____
