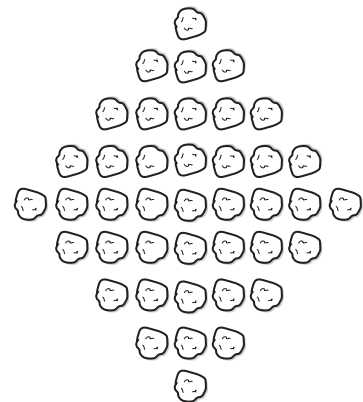
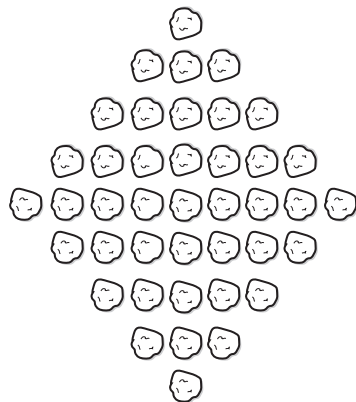
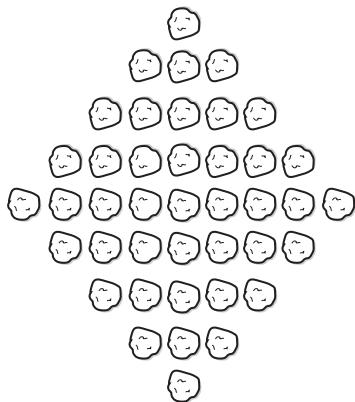
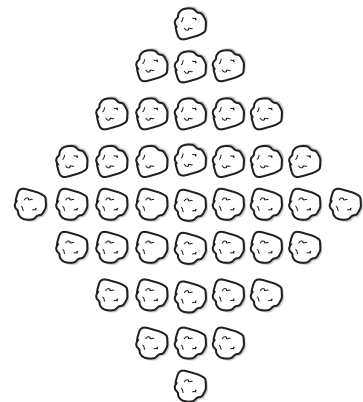
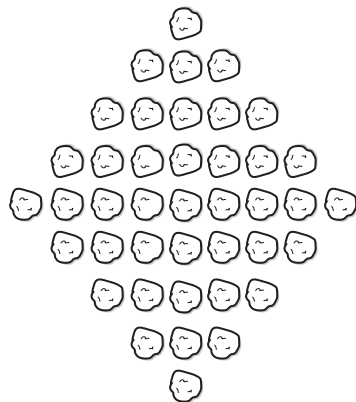
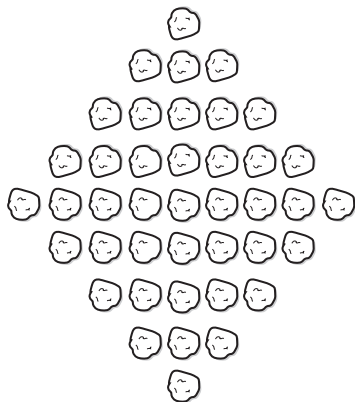
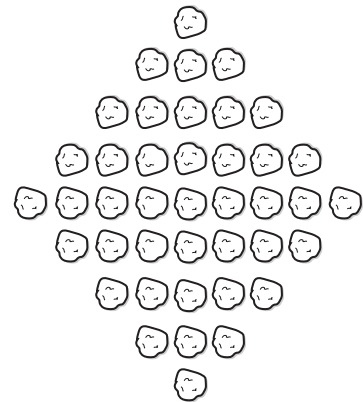
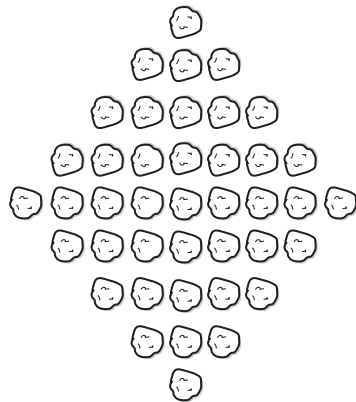
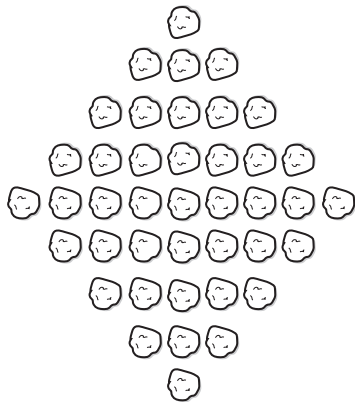


Bold Boulder Patterns

While Heracles was forced to move boulders from Mt. Olympus, he placed them in the shape of a diamond (okay, so he was bored). Heracles was really proud of himself, and marveled at all of the different patterns he saw in this boulder diamond. Your task is to find as many ways as you can to partition the array of diamonds below. Record each way as a numerical sentence.



Bold Boulder Patterns

While Heracles was forced to move boulders from Mt. Olympus, he placed them in the shape of a diamond (okay, so he was bored). Heracles was really proud of himself, and marveled at all of the different patterns he saw in this boulder diamond. Your task is to find as many ways as you can to partition the array of diamonds below. Record each way as a numerical sentence.

