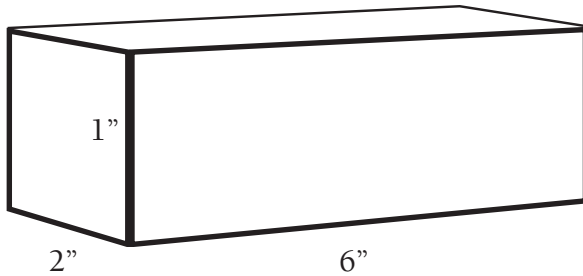


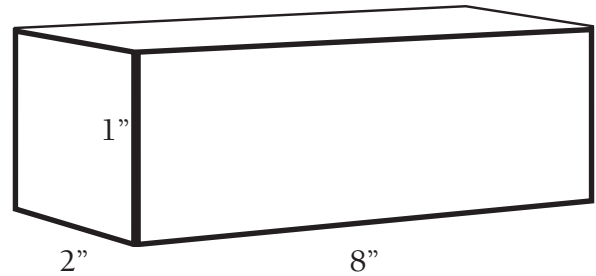
# Birthday Boxes

During Jeff's birthday party, all of the tags on his presents were lost. Use the clues to figure out who gave each present. You may use graph paper to draw nets. Show all work.

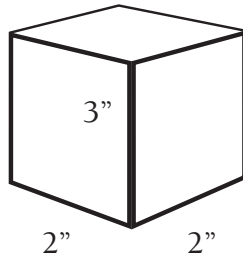
Box A



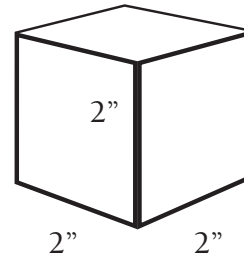
Box B



Box C



Box D



## Clues

- The box with Lyla's present has the smallest surface area and the smallest volume.
- Sarah's and Ben's presents have the same volume.
- Ben's present is in the box that has a surface area of 160 square inches.
- The box with Skylar's present has the greatest surface area.

1. Box A was given by \_\_\_\_\_
2. Box B was given by \_\_\_\_\_
3. Box C was given by \_\_\_\_\_
4. Box D was given by \_\_\_\_\_