

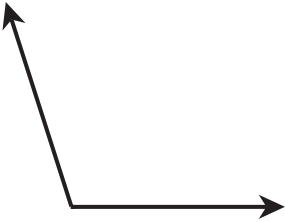
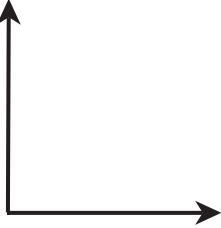
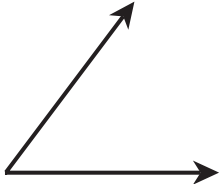
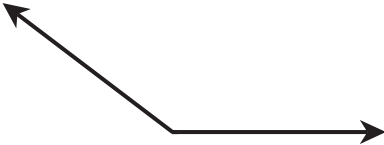
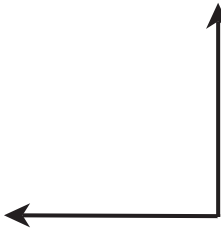
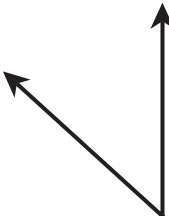


Name \_\_\_\_\_ Date \_\_\_\_\_

# What's My Angle?

Identify the angle. Use a protractor to measure the angle and record.

<p>1.</p>  <p>Angle _____ Degrees _____</p>	<p>2.</p>  <p>Angle _____ Degrees _____</p>
<p>3.</p>  <p>Angle _____ Degrees _____</p>	<p>4.</p>  <p>Angle _____ Degrees _____</p>
<p>5.</p>  <p>Angle _____ Degrees _____</p>	<p>6.</p>  <p>Angle _____ Degrees _____</p>
<p>7.</p>  <p>Angle _____ Degrees _____</p>	<p>8.</p>  <p>Angle _____ Degrees _____</p>