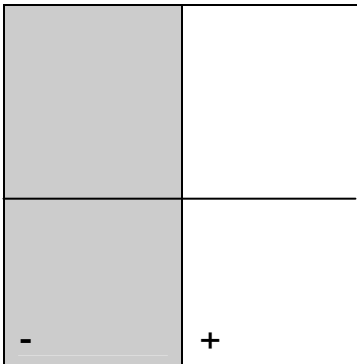


Subtracting Integers With Algeblocks

Name _____

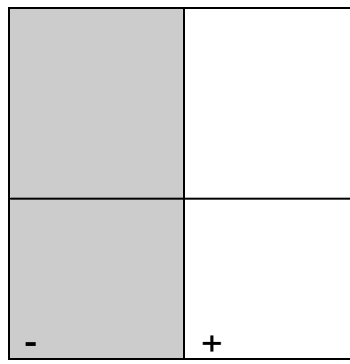
Sketch the subtraction expression in the top half of the box, and then sketch the related addition expression in the bottom half of the box.

1.
 $3 - 1$



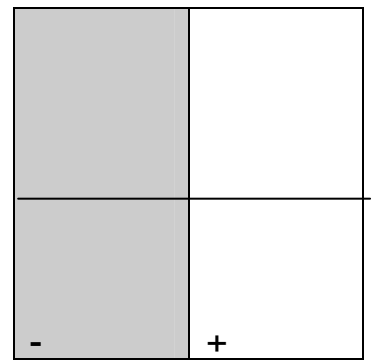
$3 + -1$

2.
 $5 - 2$



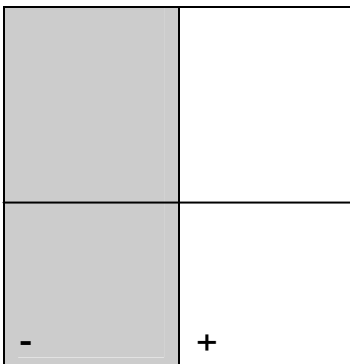
$5 + -2$

3.
 $-3 - (-1)$




$-3 + 1$

4.
 $-5 - (-2)$




$-5 + 2$

5.
 $3 - (-1)$



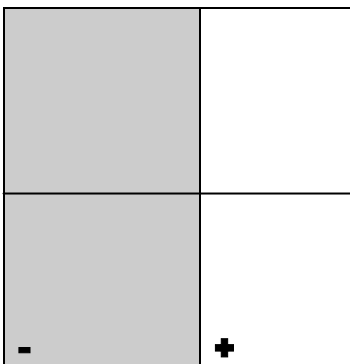
$3 + 1$

6.
 $5 - (-2)$



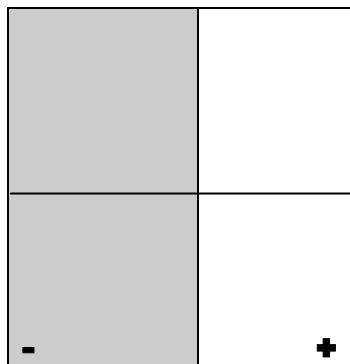
$5 + 2$

7.
 $-3 - 1$




$-3 + -1$

8.
 $-5 - 2$



$-5 + -2$

9.
 $\underline{\quad} - (-\underline{\quad})$



$\underline{\quad} + -\underline{\quad}$