

Comparing Negative Rational Numbers

Name _____



Predict which will be greater for each pair below. Use the NumLine App on the TI-73 to compare the two. Sketch the number line showing the approximate location for each.


1. $-\frac{3}{4}$ $-\frac{5}{8}$

I predict ____ > ____



2. $-1\frac{3}{5}$ $-1\frac{2}{3}$

I predict ____ > ____




3. $-3\frac{7}{10}$ $-3\frac{4}{5}$

I predict ____ > ____



4. -0.4 , -0.5

I predict ____ > ____




5. -3.75 -3.25

I predict ____ > ____




6. $-1\frac{5}{8}$ -1.5

I predict ____ > ____



7. $-\frac{1}{2}$ -0.75

I predict ____ > ____



8. -4.25 , $-4\frac{3}{5}$

I predict ____ > ____

