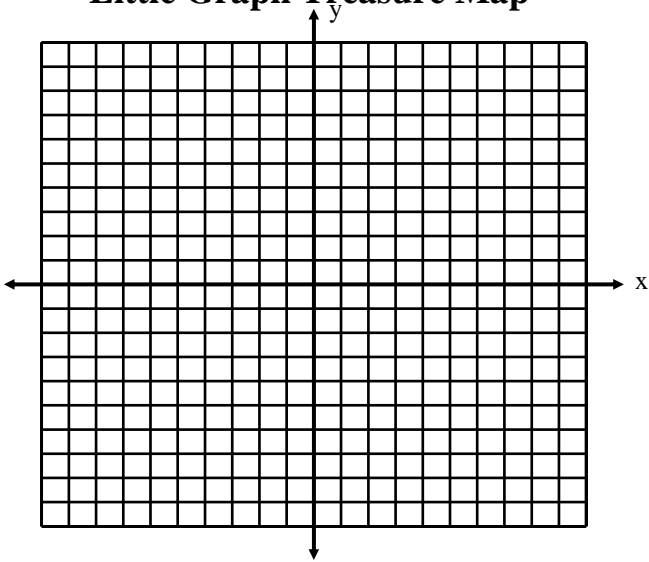
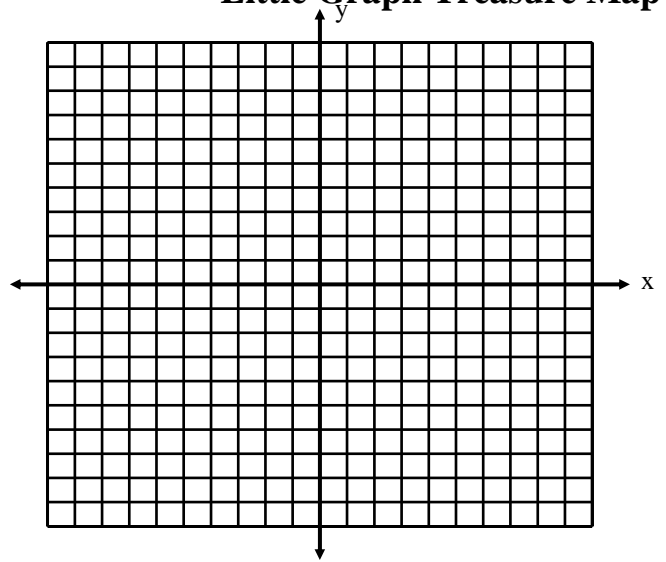


Little Graph Treasure Map



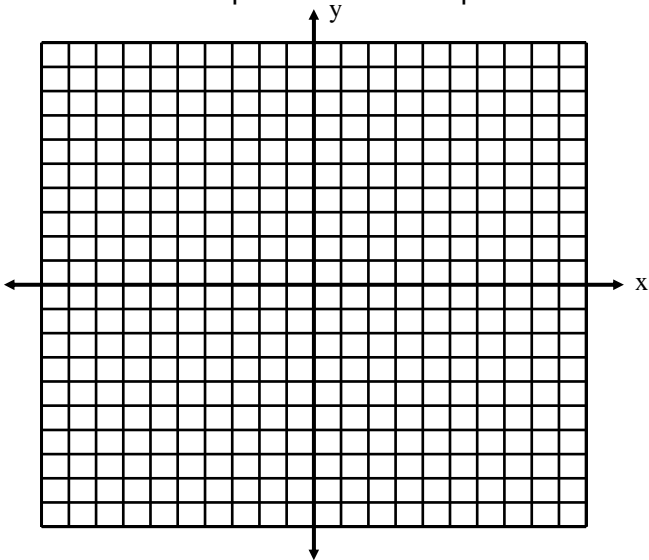
Plot a point at $(-1, -2)$. From that point, go up 1 and right 2 and plot a second point. From that second point go up 1 and right 2 again and plot your third point. From that point, go up 1 and right 2 again to plot the 4th point. Write the ordered pair for that 4th point here ()

Little Graph Treasure Map



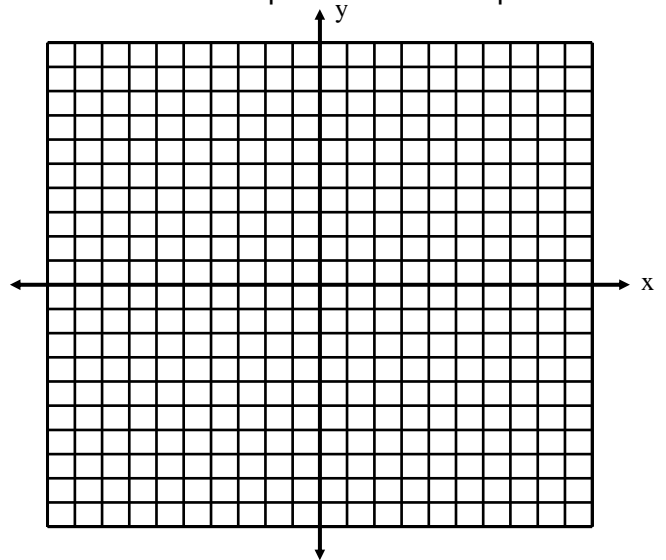
Plot a point at $(-1, -2)$. From that point, go up 1 and right 2 and plot a second point. From that second point go up 1 and right 2 again and plot your third point. From that point, go up 1 and right 2 again to plot the 4th point. Write the ordered pair for that 4th point here ()

Little Graph Treasure Map



Plot a point at $(-1, -2)$. From that point, go up 1 and right 2 and plot a second point. From that second point go up 1 and right 2 again and plot your third point. From that point, go up 1 and right 2 again to plot the 4th point. Write the ordered pair for that 4th point here ()

Little Graph Treasure Map



Plot a point at $(-1, -2)$. From that point, go up 1 and right 2 and plot a second point. From that second point go up 1 and right 2 again and plot your third point. From that point, go up 1 and right 2 again to plot the 4th point. Write the ordered pair for that 4th point here ()