


Name _____

Date _____

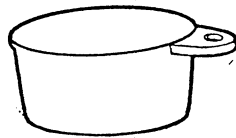
MEASURING DRY INGREDIENTS

Please help your student to fill in the blanks with the correct measurement.

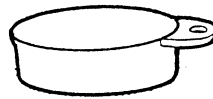
FILL IN THE BLANKS



_____ C



_____ C



_____ C



_____ C

Help your student to use the proper equipment and to measure the amounts below. Date and initial the following upon completion.

MEASURE DRY INGREDIENTS

1 CUP	_____	_____	_____	_____
1/2 CUP	_____	_____	_____	_____
1/3 CUP	_____	_____	_____	_____
1/4 CUP	_____	_____	_____	_____
1 1/4 CUP	_____	_____	_____	_____
3/4 CUP	_____	_____	_____	_____
2/3 CUP	_____	_____	_____	_____
1 1/2 CUP	_____	_____	_____	_____
Date:	_____	_____	_____	_____